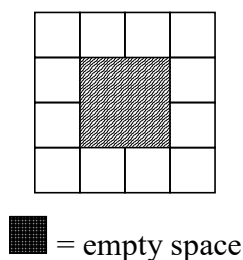


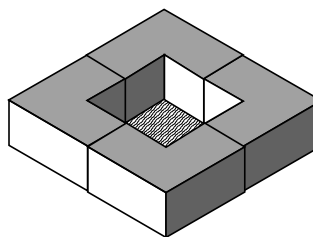
You Need

- Four [4] tricubes and a recording sheet

This is a *looking down view* of a building made with *all four* tricubes.



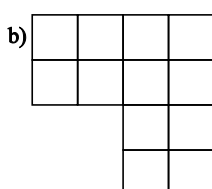
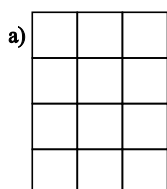
An *isometric view* of the building would look like this:



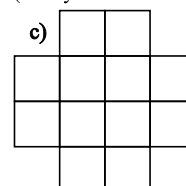
Your Task

1. Make each building below from four tricubes.

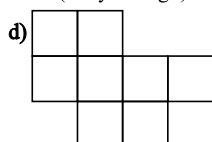
Draw its isometric view on the recording sheet.



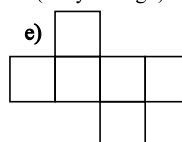
(2 ways for this one)



(2 layers high)



(2 layers high)



Challenge

Make your own tricube building.

Draw its looking down view and its isometric view.

Show your partner the looking down view and ask them to make your building.

Does it turn out like your isometric view?